


Instructions: Find and count the summer items




				
<input type="text"/>	<input type="text"/>	<input type="text"/>	<input type="text"/>	<input type="text"/>

I Spy Summer – Level 1 (ages 3-4)

Answer Key

 = 4

 = 5

 = 5

 = 3

 = 3

Teacher Tips

Ask students to point and say the objects.








- “Find the hat.”
- “Where is the sun cream?”
- “Show me the bucket.”

Optional extension:

- Count together as a class.








Instructions: Find each item. Count how many you can see. Write the number in the box.



						
<input type="text"/>	<input type="text"/>	<input type="text"/>	<input type="text"/>	<input type="text"/>	<input type="text"/>	<input type="text"/>

I Spy Summer – Level 2 (ages 4-6)

Answer Key

	= 4		= 3
	= 5		= 3
	= 5		= 4
	= 3		

Teacher Tips

Focus on **counting and simple sentences**.

After counting, ask students to say full sentences.

- “I see four ice creams.”
- “There are three hats.”
- “How many sandcastles can you see?”

I SPY – SUMMER (Level 3)

Instructions: Find each item and count carefully. Write the number in the box.










Bonus Question: Which item appears the most?



								
<input type="text"/>	<input type="text"/>	<input type="text"/>	<input type="text"/>	<input type="text"/>	<input type="text"/>	<input type="text"/>	<input type="text"/>	<input type="text"/>

I Spy Summer – Level 3 (ages 6-8)

Answer Key

	= 4		= 3
	= 5		= 4
	= 5		= 6
	= 3		= 7
	= 3		

Teacher Tips

Focus on **comparison and critical thinking**.

Ask students to compare the numbers.

- Which object appears the most?
- Which object appears the least?
- Are there more suns or hats?

Optional challenge:

- How many more crabs than ice creams?